

buki di contesta

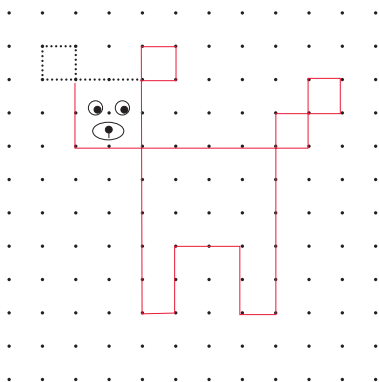
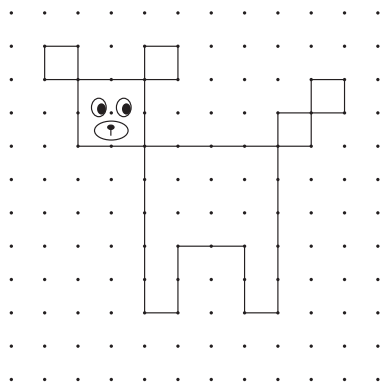
# Conta cu mi

buki di contesta plus

# 3




## 1 pinta mescos.




## 2 completa e rijnan.

tip!

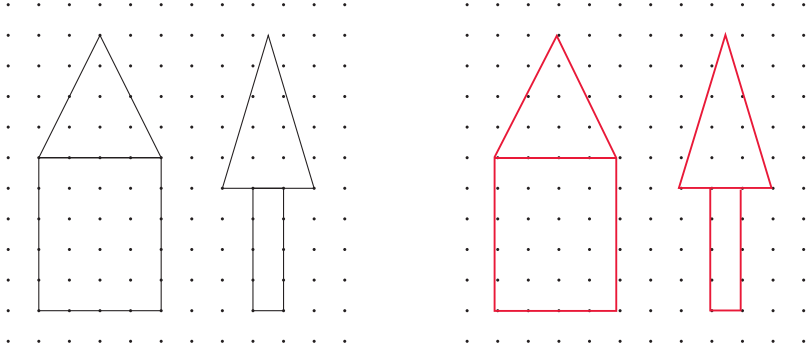


## 3 hunto ta 10. mas cu 1 contesta.

tip!



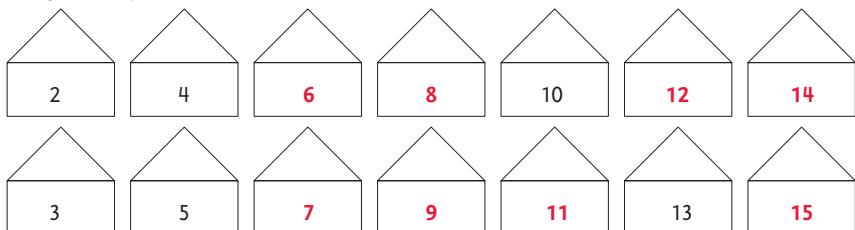
## 4 pinta mescos.




## 5 tur dos ta haya mes hopi placa.



## 6 completa e rijnan.

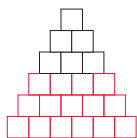


7 **cua number falta?**

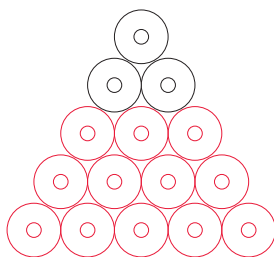


8 **haci e stapelnan mas grandi.**  
pinta na cada stapel 3 rij acerca.

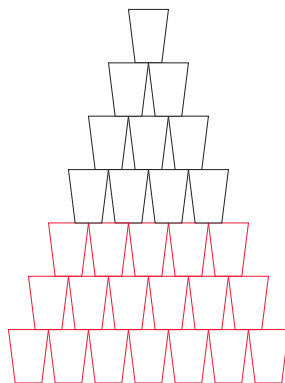
tip!



hunto tin **21**



hunto tin **15**



hunto tin **28**

9 **hunto ta 12. mas cu 1 contesta.**



10 slinger di quanto bo ta mira?



abo mes traha un slinger. **mas cu 1 contesta.**

tip!

slinger di 11

slinger di **19**


slinger di **25**

11 con bo number ta?


pinta e prome letter di bo number.

despues pinta e prome letter di bo fam. **mas cu 1 contesta.**

tip!



12 hunto ta 15. **mas cu 1 contesta.**



13 cuanto bloki tin?

tip!



7



5



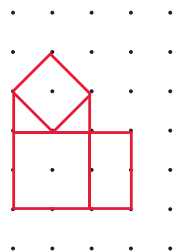
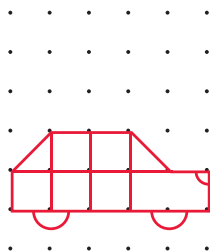
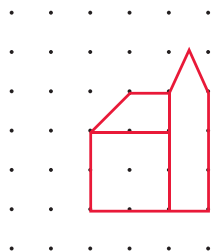
6



8

14 pinta algo.  
laga bo amigo pinta mescos. **mas cu 1 contesta.**

tip!




15 cuanto mosaik tin?



4



24



20



21



19

e somnan ta bruha. **mas cu 1 contesta.**  
drecha nan.

2	11	9	+	=
9	+	2	=	11

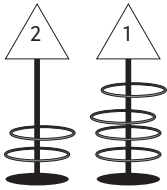
13	5	8	+	=
8	+	5	=	13

7	16	9	+	=
7	+	9	=	16

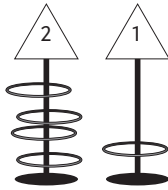
4	12	8	-	=
12	-	8	=	4

20

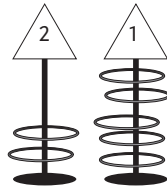
cuanto punto nan ta haya?



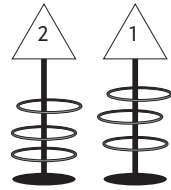
nico
8



tim
9



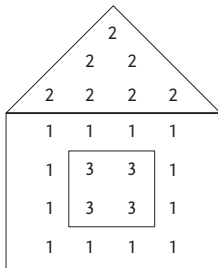
rosa
9



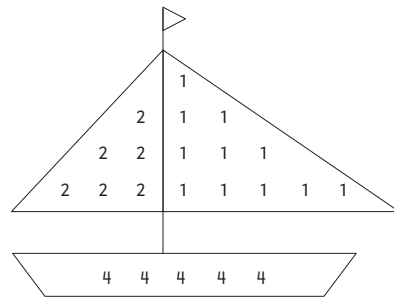
ina
9

21

cuanto punto?  
bo por kleur e plachi.



38



43

22

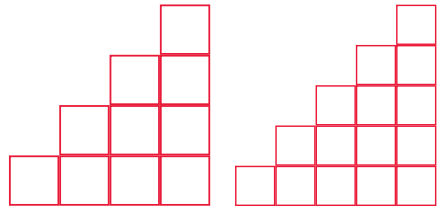
cua number falta?

tip!





23 sigui na e mesun manera.



24 ban hunga e wega di colebra.

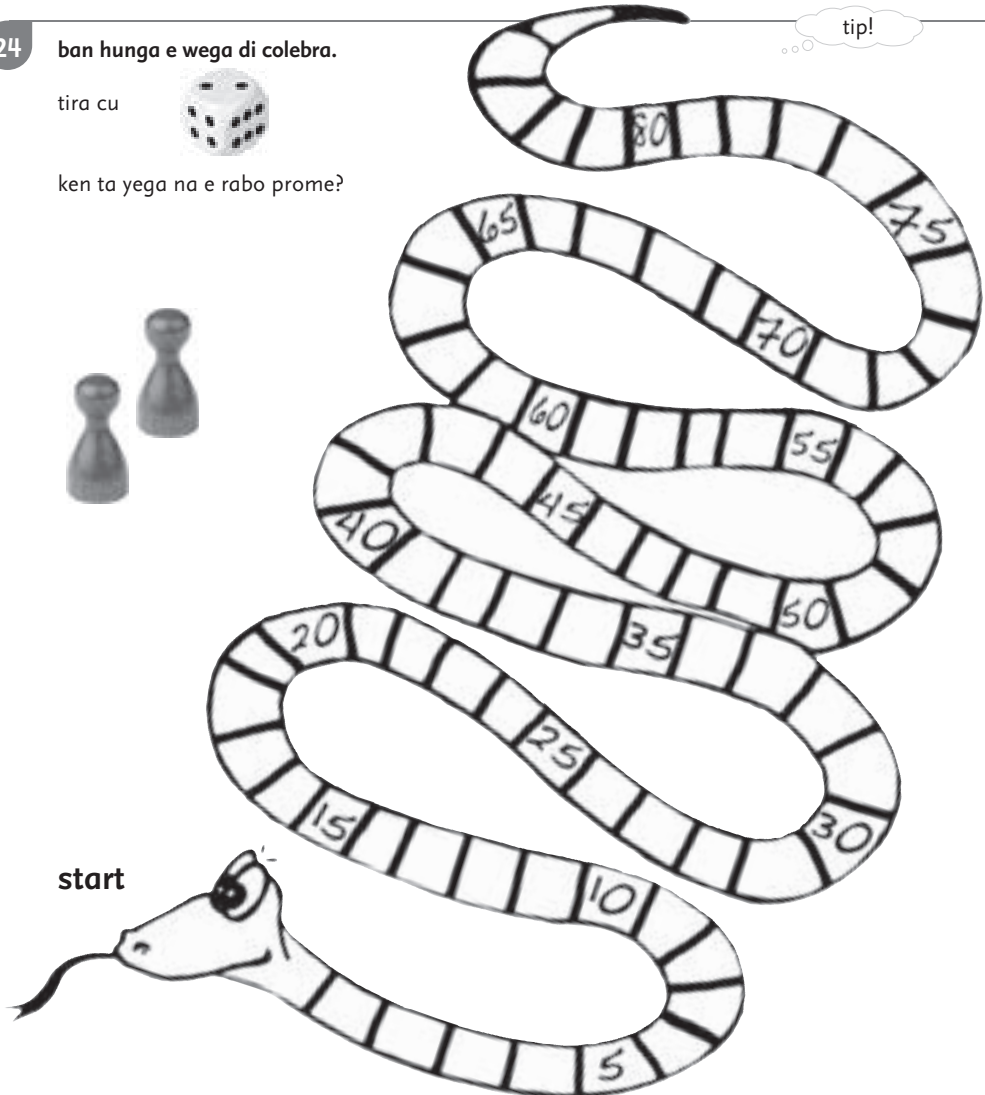
tira cu



ken ta yega na e rabo prome?



tip!



1 ken tin mas punto?  
kleur su number.

tip!

marc

josh

sem

kim

pinta cada biala 3 dart. **mas cu 1 contesta.**

dany  
9

mel  
9

rita  
8

ica  
10

2 cuanto mosaik tin? **mas cu 1 contesta.**

8

24

15

14

3 hunto ta 20.  
**mas cu 1 contesta.**

4

e somnan ta bruha. **mas cu 1 contesta.**  
drecha nan.

21	12	9	+	=
12	+	9	=	21

+	=	18	31	13
18	+	13	=	31

=	25	-	11	14
25	-	11	=	14

11	32	21	=	-
32	-	21	=	11

tip!

5

kleur tur driehoek.



6

slinger di cuanto bo ta mira?

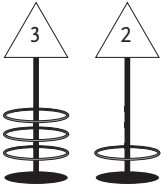


slinger di **24** \_\_\_\_\_

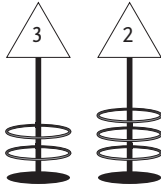
tip!

## 7 ken ta gana?

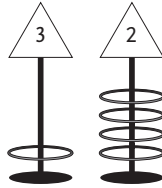
kleur su number.




tim



tica



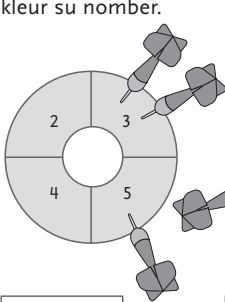
nora



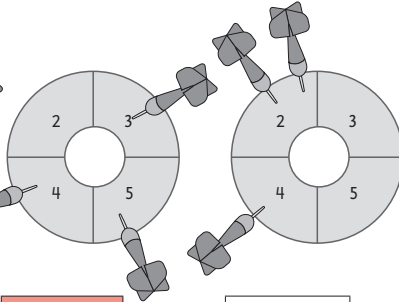
sam

## 8 ken ta gana?

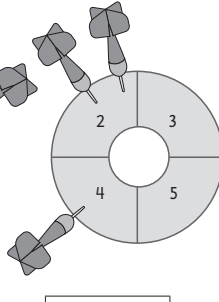
kleur su number.



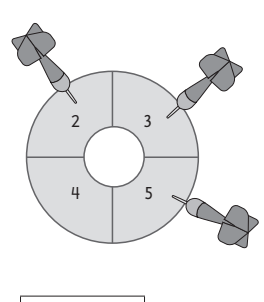
tim



ina



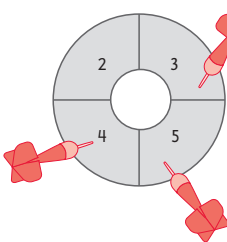
gibi



berti

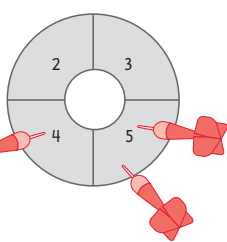
## 9 pinta cada biala 3 dart.

mas cu 1 contesta.



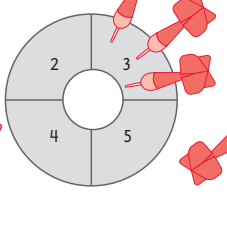
marc

12



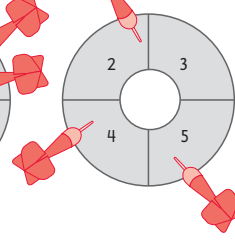
tica

14



tommy

9



anita

11

10

bo mes pensa cuant'or tin.

pinta e mannan y yena e ora. **mas cu 1 contesta.**

1 or



7 or



cuarto pasa di 1



10 or y mey

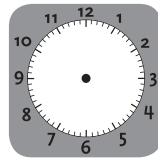


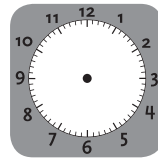
cuarto pasa di 3












11

cuanto tempo ta dura mas o menos? **mas cu 1 contesta.**

5 minuut



10 ora



15 minuut



2 minuut



5 ora

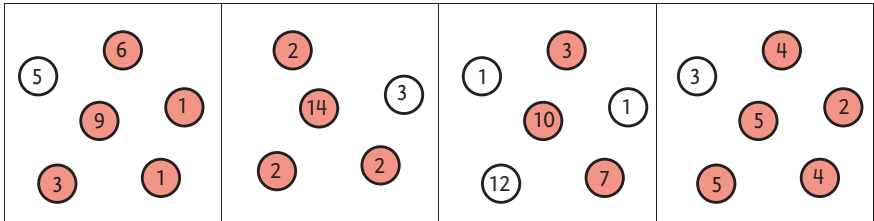
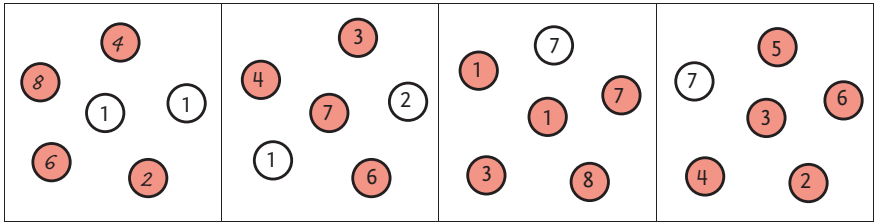


30 minuut

12

kleur e numbranan cu ta suma 20. **mas cu 1 contesta.**

tip!




13

quanto mosaik tin? **mas cu 1 contesta.**

35 mosaik



18 mosaik



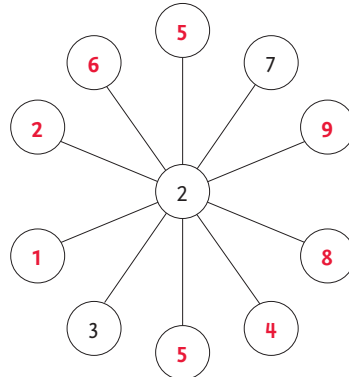
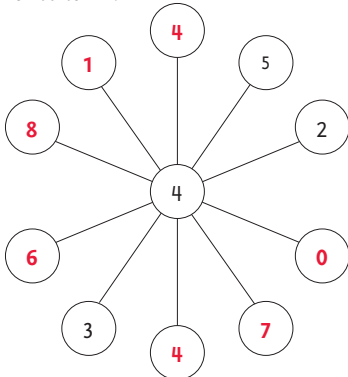
28 mosaik

14

strea di number.

hunto ta 12.

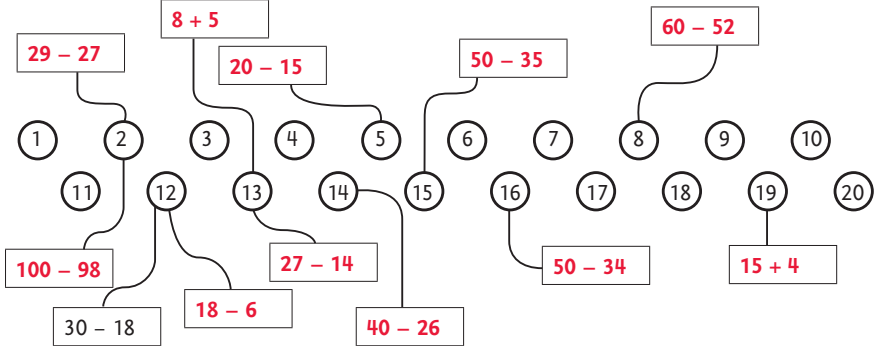
tip!



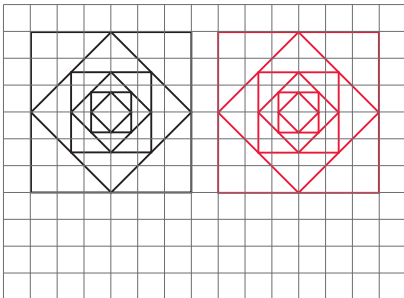
15 huntu ta 30. mas cu 1 contesta.




16 pensa som cu ta pas. mas cu 1 contesta.



17 pinta mescos.



pinta un bo mes.  
mas cu 1 contesta.



18

e somnan ta bruha. **mas cu 1 contesta.**  
drecha nan.

4	17	13	+	=
<b>4</b>	<b>+</b>	<b>13</b>	<b>=</b>	<b>17</b>

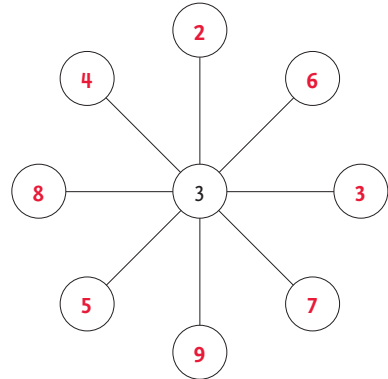
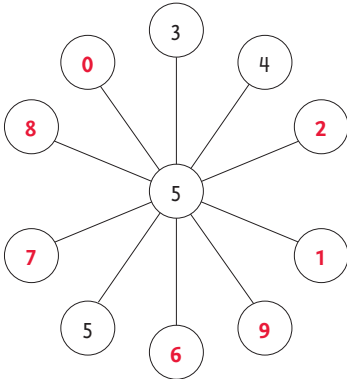
3	17	20	=	-
<b>20</b>	<b>-</b>	<b>17</b>	<b>=</b>	<b>3</b>

+	=	23	15	8
<b>15</b>	<b>+</b>	<b>8</b>	<b>=</b>	<b>23</b>

13	14	27	-	=
<b>27</b>	<b>-</b>	<b>13</b>	<b>=</b>	<b>14</b>

19

strea di number. **mas cu 1 contesta.**  
hunto ta 14.



20

slinger di cuanto bo ta mira?

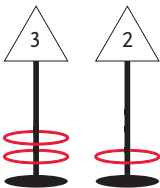


tip!

slinger di **32**

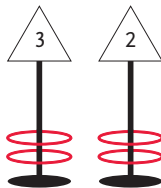
21

pinta e renchinan. **mas cu 1 contesta.**



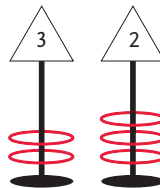
mel

8



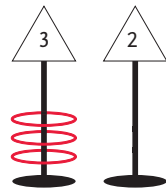
isa

10



josh

12



kim

9



22

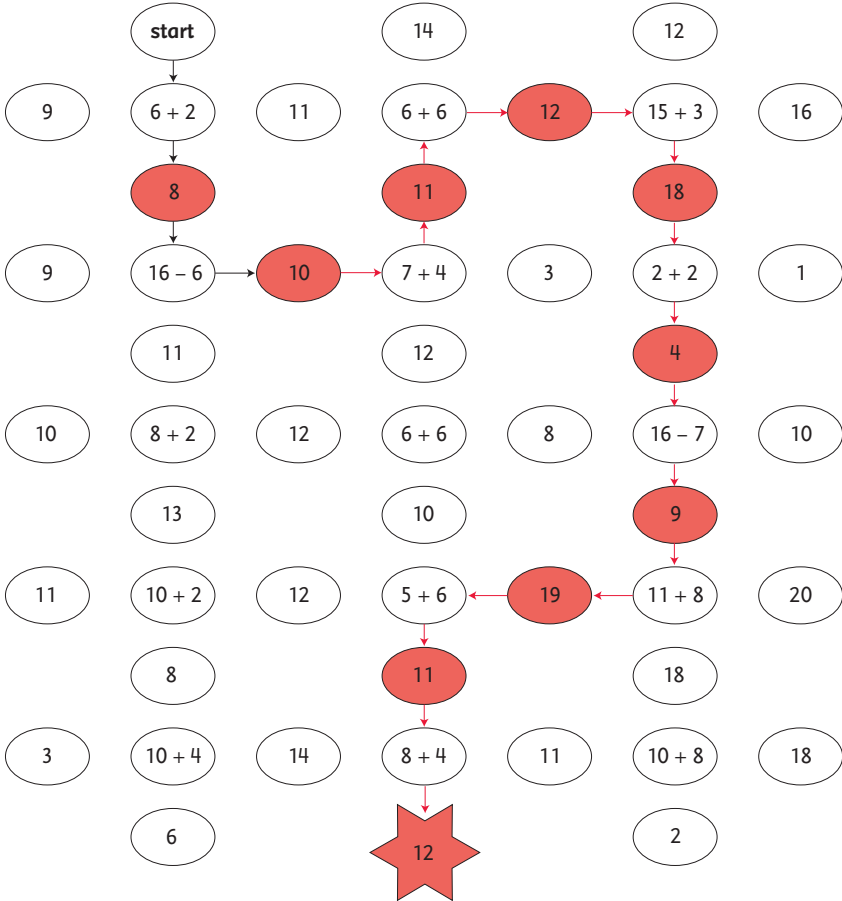
wega cu som.

traha e som.

kleur e contesta corecto.

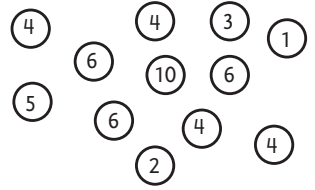
traha e siguiete som.

sigui te ora bo wega na e strea.



1 **kleur e numbernan. mas cu 1 contesta.**

busca 3 number cu ta suma 10. kleur nan geel. **4, 4, 2**  
 busca 3 number cu ta suma 12. kleur nan cora. **6, 1, 5**  
 busca 3 number cu ta suma 15. kleur nan blauw. **6, 6, 3**  
 busca 3 number cu ta suma 18. kleur nan berde. **10, 4, 4**



2 **kico bo por cumpra? mas cu 1 contesta.**

bo tin:



f 1,50



f 3,00



f 2,00



f 0,50

\_\_\_\_\_

\_\_\_\_\_

\_\_\_\_\_


\_\_\_\_\_

\_\_\_\_\_

3 **pinta e mannan y yena e ora.**

riba e oloshi grandi ta mey ora mas laat.

tip!



6 or	6 or y mey	8 or y mey	9 or	5 or	5 or y mey
1 or y mey	2 or	10 or	10 or y mey	2 or y mey	3 or

4

slinger di cuanto bo ta mira?

slinger di **45** \_\_\_\_\_

tip!

bo mes traha un slinger: **mas cu 1 contesta.**

slinger di \_\_\_\_\_

5

bo mes traha som.

traha 4 som cu: 6, 14 y 8

$$6 + 8 = 14$$

$$8 + 6 = 14$$

$$14 - 6 = 8$$

$$14 - 8 = 6$$

traha 4 som cu: 19, 7 y 12

$$7 + 12 = 19$$

$$12 + 7 = 19$$


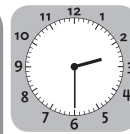
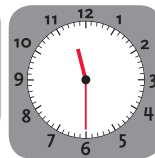
$$19 - 12 = 7$$

$$19 - 7 = 12$$

6

pinta e mannan y yena e ora.

riba e oloshi grandi ta mey ora mas tempran.



5 or


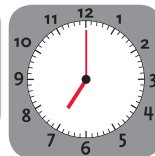
4 or y mey

12 or

11 or y mey

2 or y mey

2 or



4 or

3 or y mey

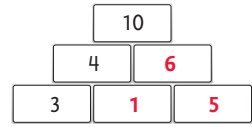
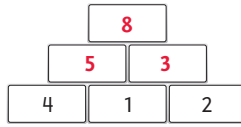
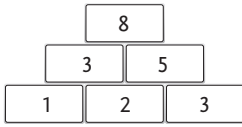
7 or y mey

7 or

1 or y mey

1 or

## 7 yena e numbertan.



## 8 nan ta bay haci aña.

cuanto dia falta?

awe ta 2 di november.

november					
dialuna	1	8	15	22	29
diamars	2	9	16	23	30
diaranson	3	10	17	24	1
diahuebs	4	11	18	25	2
diabierna	5	12	19	26	3
diasabra	6	13	20	27	4
diadomingo	7	14	21	28	5

tip!

andy falta 5 dia.

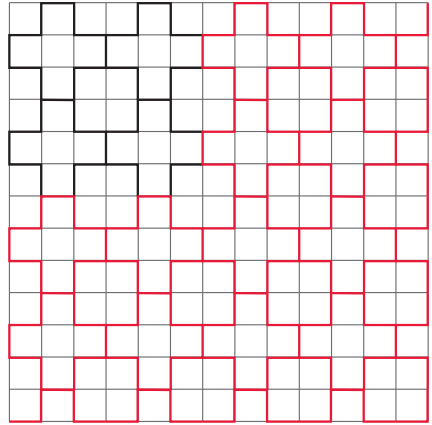
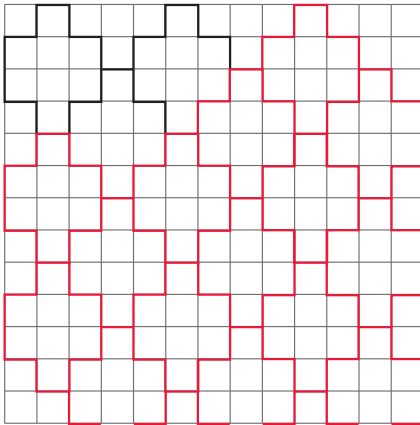
betty falta 10 dia.

carlo falta 13 dia.

nico falta 23 dia.

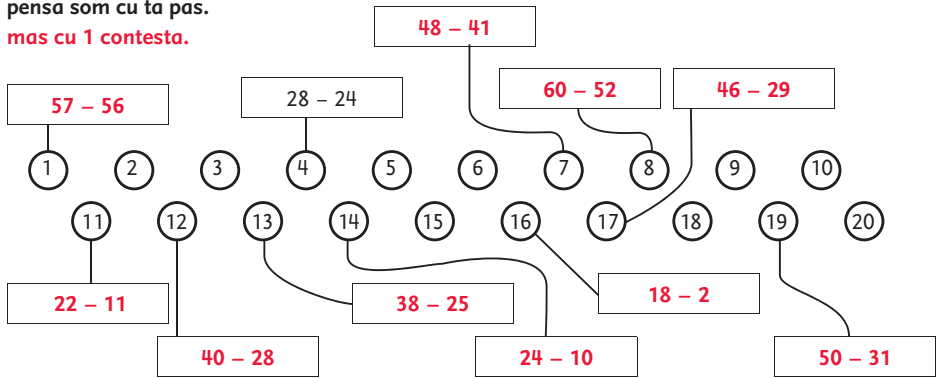
mila falta 28 dia.

## 9 sigui na e mesun manera.



10

pensa som cu ta pas.  
mas cu 1 contesta.




11


tur mester haya mes hopi. mas cu 1 contesta.  
kleur e pidanan.




marc      rita      dany




marc      rita      dany




lucas      nora      tommy      sam



lucas      nora      tommy      sam








lucas      nora      tommy      sam




marc      rita      dany

12

cumpra pan.

<p>f 3</p> 	<p>f 1</p>  <p>50 cen</p>  <p>40 cen</p>  <p>30 cen</p> 
--	---

cuanto nan ta sali hunto?



\_\_\_\_\_ 8 florin y \_\_\_\_\_ 50.cen

13

yena e numbertan.

di robes pa drechi ta suma 15.

di ariba bay about tambe. **mas cu 1 contesta.**

	15	
2	7	6
9	5	1
4	3	8

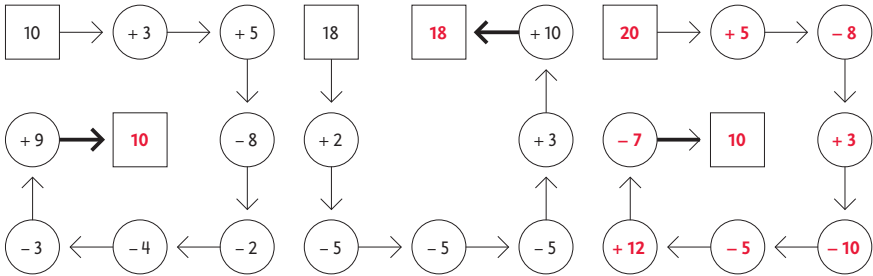
	15	
11	0	4
3	5	7
1	10	4

	15	
6	7	2
1	5	9
8	3	4

	15	
2	7	6
9	5	1
4	3	8

tip!


14 **sigui e flechanan.**  
skirbi e contesta.



15 **slinger di cuanto bo ta mira?**

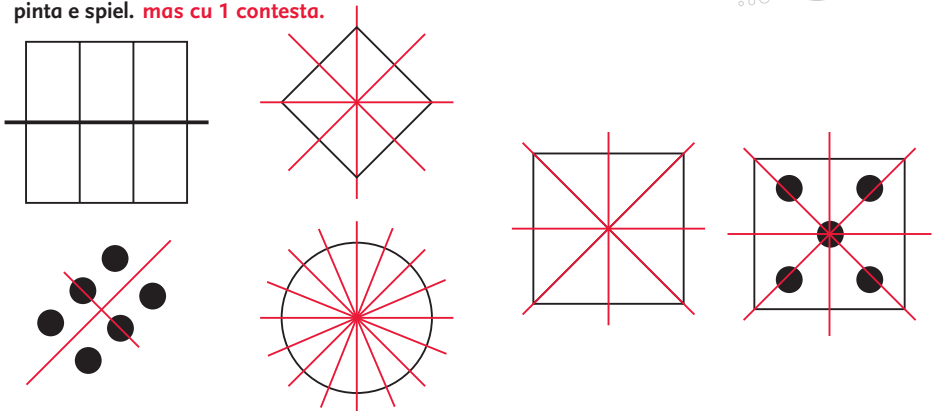


16 **pinta e mannan.**  
cuant'or ... **mas cu 1 contesta.**



17 **pinta e spiel.** **mas cu 1 contesta.**

tip!



18


completa e rijnan.

tip!

bo mes traha un rij unico. **mas cu 1 contesta.**

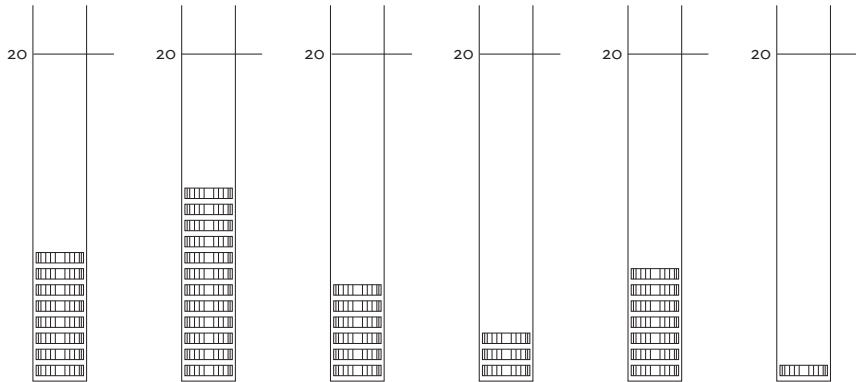
19

kleur e numberran.

busca 3 number cu ta suma 12, kleur nan geel. **4, 4, 4**busca 3 number cu ta suma 18, kleur nan cora. **6, 6, 6**busca 3 number cu ta suma 15, kleur nan blawu. **5, 5, 5**busca 3 number cu ta suma 30, kleur nan berde. **10, 10, 10**

20

cuanto bo por pone acerca?



12

8

14

17

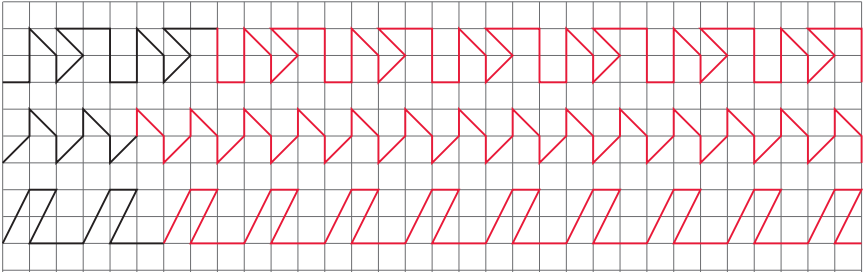
13

19



21

sigui na e mesun manera.



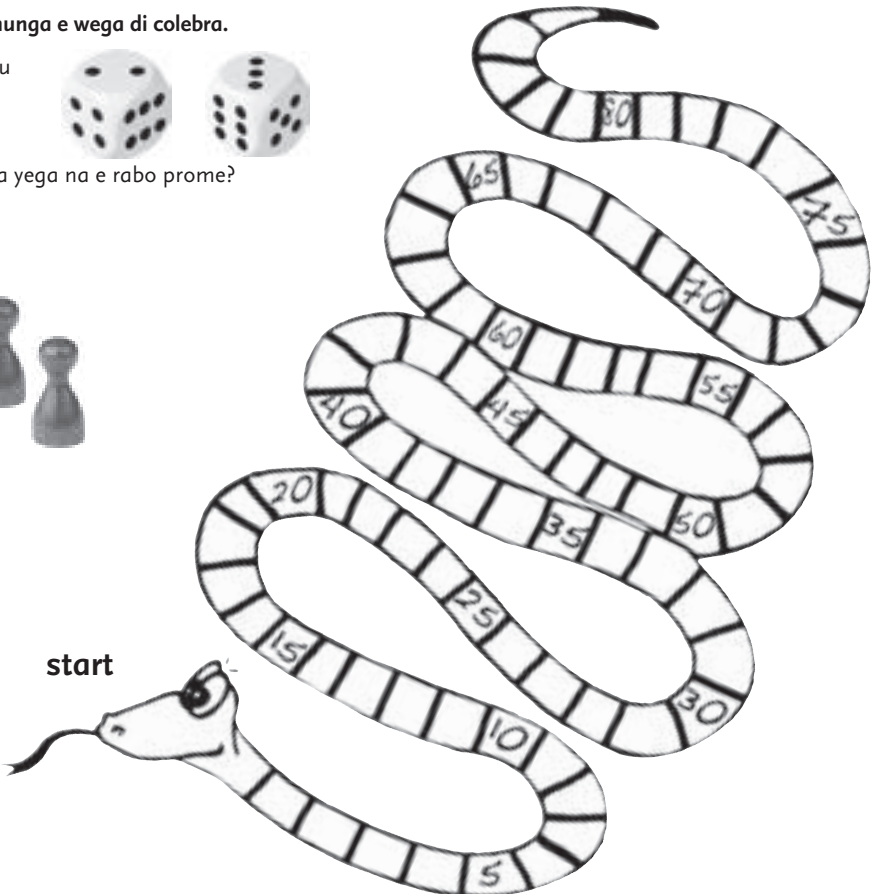
22

ban hunga e wega di colebra.

tira cu



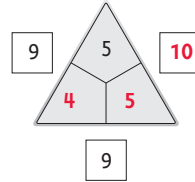
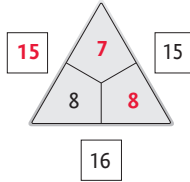
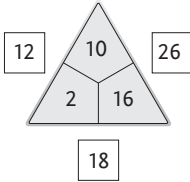
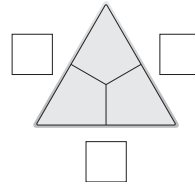
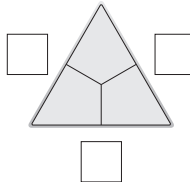
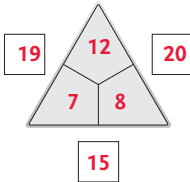
ken ta yega na e rabo prome?





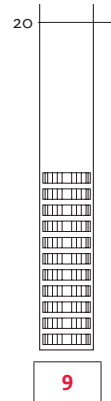
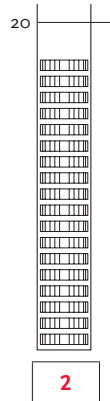
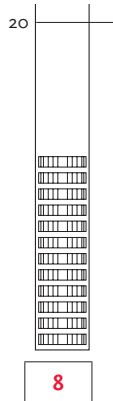
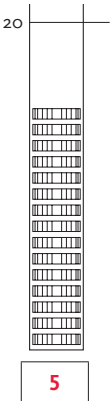
4

rek cu driehoek.

abo mes pensa. **mas cu 1 contesta.**

5

quanto bo por pone acerca?



6

traha som.

wak y compara.

$9 + 10 = 19$

$9 + 8 = 17$

$19 - 8 = 11$

$20 - 8 = 12$

$8 + 9 = 17$

$10 + 9 = 19$

$18 - 7 = 11$

$19 - 7 = 12$

$8 + 10 = 18$

$11 + 9 = 20$

$17 - 6 = 11$

$18 - 6 = 12$

$7 + 9 = 16$

$11 + 10 = 21$

$16 - 5 = 11$

$17 - 5 = 12$

$7 + 10 = 17$

$11 + 11 = 22$

$15 - 4 = 11$

$16 - 4 = 12$

$6 + 7 = 13$

$12 + 11 = 23$

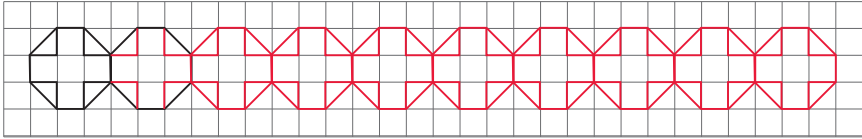
$14 - 3 = 11$

$15 - 3 = 12$

tip!

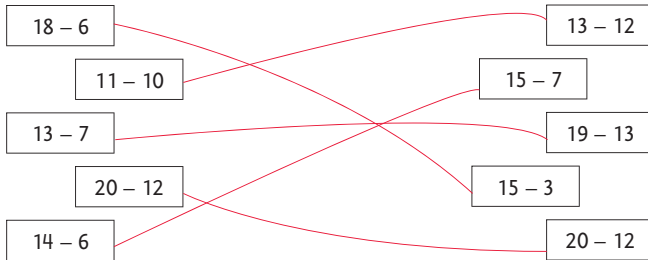
**mas cu 1 contesta.**

7 sigui na e mesun manera.

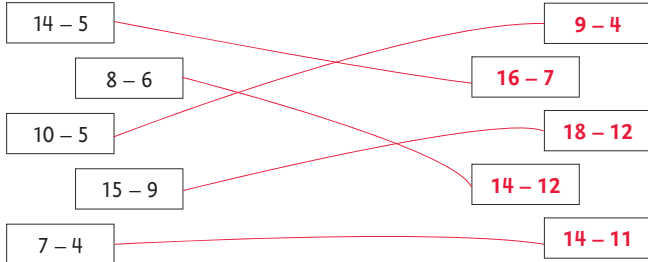


8 cua di e somnan tin e mesun contesta?

conecta.



abo mes pensa som cu ta pas. **mas cu 1 contesta.**



9 tira 5 bala.

pinta unda nan ta cay. **mas cu 1 contesta.**



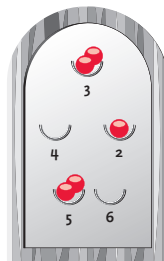
josh

20 punto



luci

25 punto



betty

18 punto



sam

24 punto

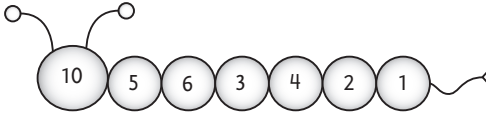
10

**traha e bichi di number.**

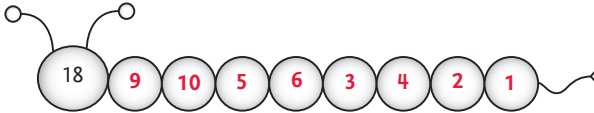
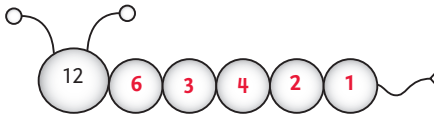
cada biah e mita.

si no ta logra, pone 1 acerca.

tip!



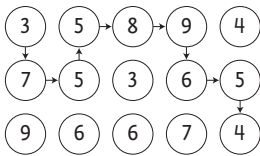
abo awor.



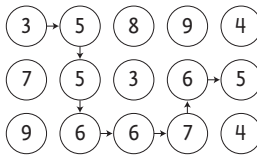
11

**cuanto nan ta suma?**

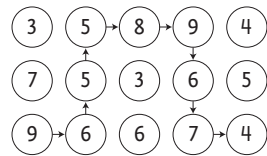
sigui e flechanan.



52



43

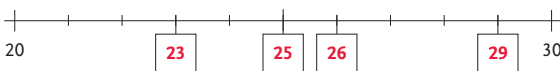


59

12

**cua number ta pas?**

tip!



13 cuanto tempo e ta dura? **mas cu 1 contesta.**

cuminsa



caba



les di piano ta dura 45 minuut

cuminsa



caba

cuminda di merdia ta dura **30 minuut**

cuminsa



caba

haci deporte ta dura **2 ora**

cuminsa



caba

wak television ta dura **1 ora**

## 14 slinger di cuanto bo ta mira?

tip!

slinger di **40**slinger di **48**slinger di **44**15 yena e numbernan cu falta.  
cada biaha na un otro manera. **mas cu 1 contesta.**

15
5 + 5 + 5
2 + 7 + 6
9 + 1 + 5
4 + 8 + 3

21
7 + 7 + 7
6 + 8 + 7
5 + 7 + 9
3 + 12 + 6

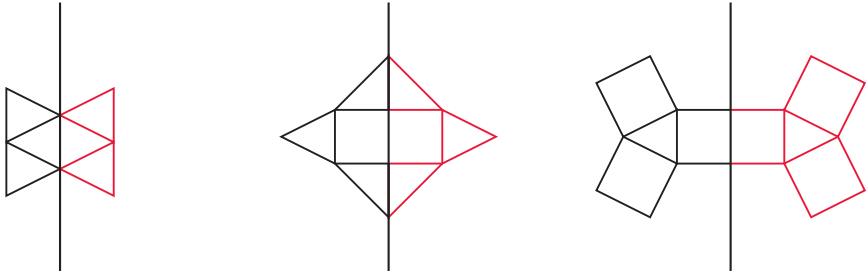
26
10 + 9 + 7
9 + 8 + 9
2 + 16 + 8
14 + 6 + 6

31
8 + 8 + 15
9 + 9 + 13
6 + 12 + 13
7 + 10 + 14

16

**pinta e refleho.**

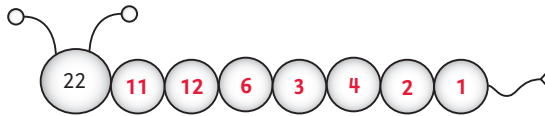
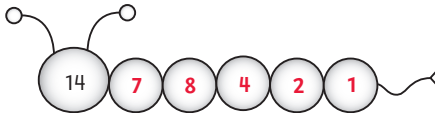
uza spiel pa controla.  
kleur e figuranan.



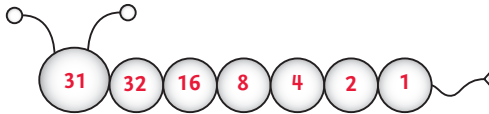
17

**bichi di number.**

cada biaha e mita.  
si no ta logra, pone 1 acerca.



bo mes traha un bichi. **mas cu 1 contesta.**



18

**yena e numbernan.**

cada biaha ta suma 15.

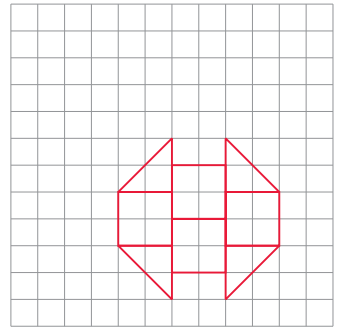
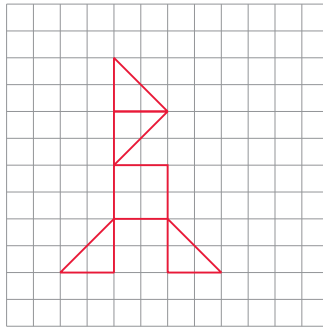
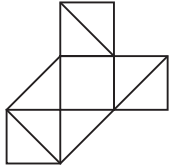
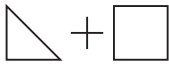
	→ 15		
	4	6	5
	6	5	4
↓ 15	5	4	6

	→ 15		
	3	7	5
	7	5	3
↓ 15	5	3	7

**mas cu 1 contesta.**


	→ 15		
	6	8	1
	2	5	8
↓ 15	7	2	6

19

traha cu mosaik.  
un raket.abo mes traha 2 figura. **mas cu 1 contesta.**

20

piki punto.




5 10 12 1

$12 - 10 = 2$

$2 + 5 = 7$

$7 + 1 = 8$




5 9 1 15

$9 - 5 = 4$

$4 + 1 = 5$

$15 - 5 = 10$


abo mes traha 2 wega pa bo amigo. **mas cu 1 contesta.**

13 5 7 5

\_\_\_\_\_

\_\_\_\_\_

\_\_\_\_\_



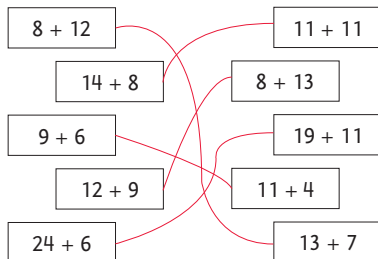
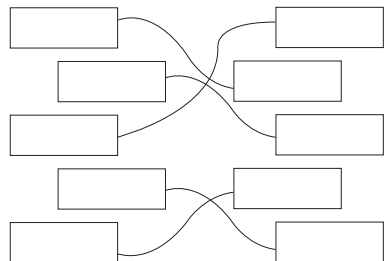
5 3 8 20

\_\_\_\_\_

\_\_\_\_\_

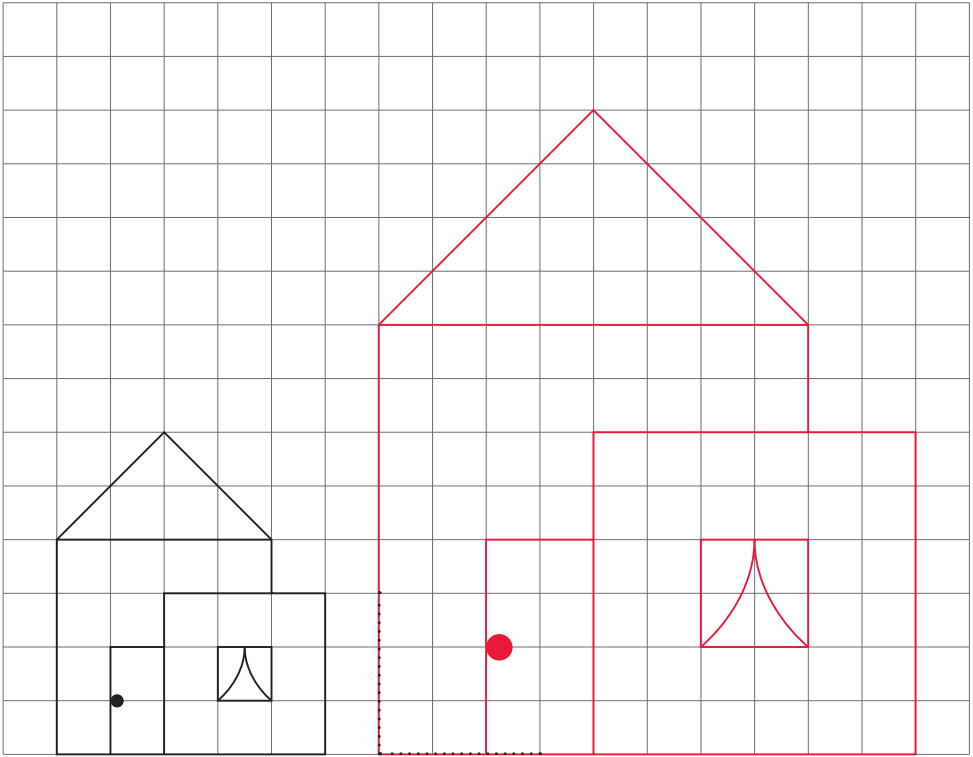
\_\_\_\_\_

21

cua di e somnan tin e mesun contesta?  
conecta.abo mes awor. **mas cu 1 contesta.**



22 pinta e cas 2 biaha mas grandi.



23 slinger di cuanto bo ta mira?



slinger di **25** \_\_\_\_\_



slinger di **25** \_\_\_\_\_



slinger di **50** \_\_\_\_\_

- 1 tira 6 bala.  
pinta unda nan ta cay. **mas cu 1 contesta.**



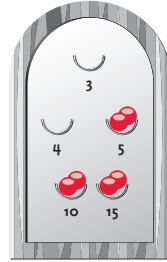
tica
30 punto



marc
27 punto



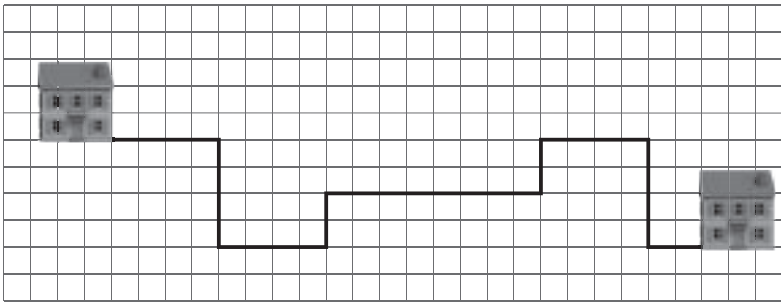
gibi
50 punto



luci
60 punto

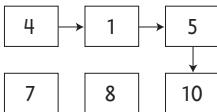
- 2 con largo e caminda ta?  
1 km **17 km**

tip!

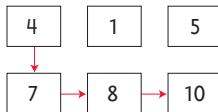


- 3 pinta e flechanan.

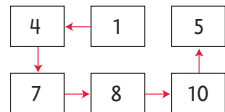
ta suma  
20



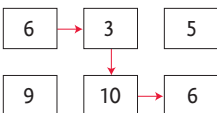
ta suma  
29



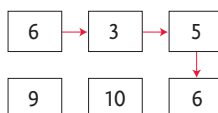
ta suma  
35



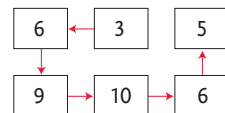
ta suma  
25



ta suma  
20



ta suma  
39



4


scoje 3 colo.

kleur cada bandera diferente. **mas cu 1 contesta.**


5

unda bo ta paga mas?




kleur e hoki cora.





of




of



of



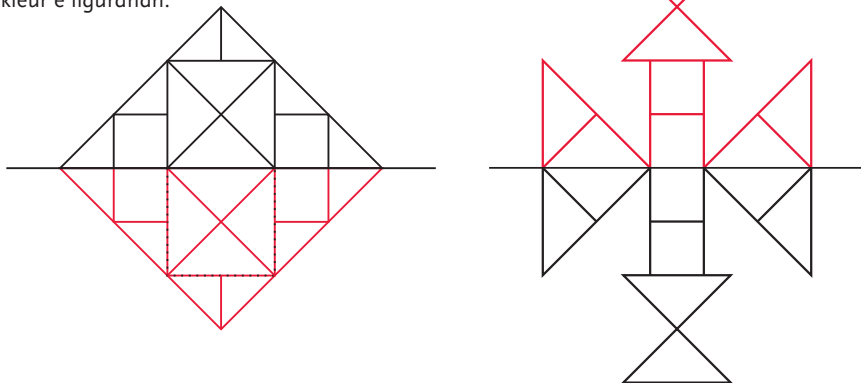
of



6

**pinta e refleho.**

uza spiel pa controla.  
kleur e figuranan.



7

**yena e numbernan.**

cada biaha ta suma 15.

	→ 15		
	4	6	5
	6	5	4
↓ 15	5	4	6

	→ 15		
	3	7	5
	7	5	3
↓ 15	5	3	7

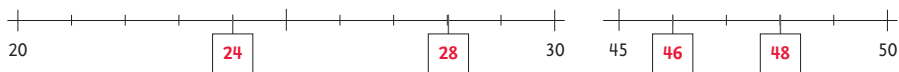
**mas cu 1 contesta.**

	→ 15		
	4	8	3
	2	5	8
↓ 15	9	2	4


8

**cua number ta pas?**

tip!



9


**piki punto.**

1	8	3	4
---	---	---	---

$$8 + 3 = 11$$

$$11 + 1 = 12$$

$$12 - 4 = 8$$



2	6	7	9
---	---	---	---

$$9 - 7 = 2$$

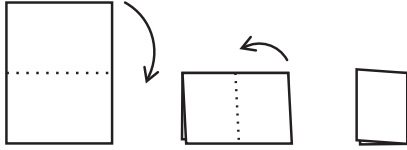
$$2 + 6 = 8$$

$$8 + 2 = 10$$

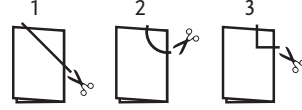
10

**rosa tin 3 blachi.**

e ta dobla cada blachi 2 biaha.



despues e ta corta un pida afo.

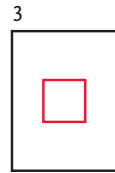
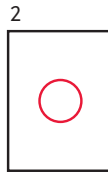


tip!

e ta habri e blachinan.

con e blachinan ta mustra awor?

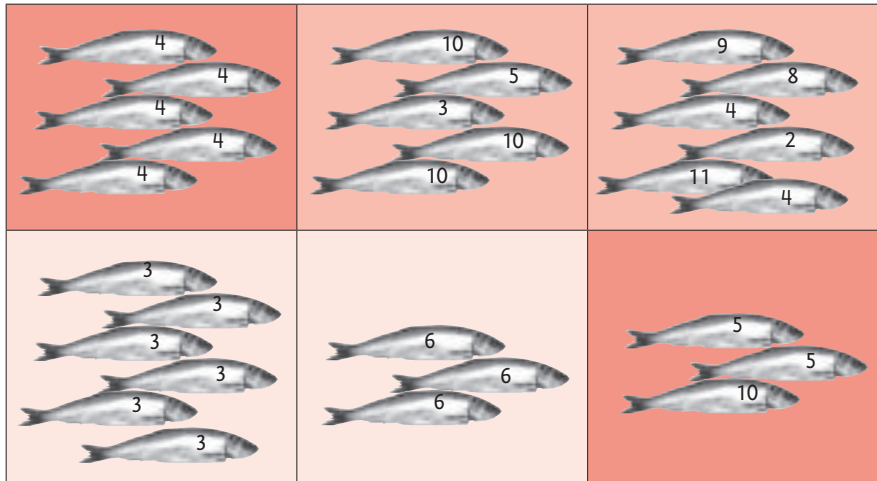
pinta nan.



11

**den cua di e bakinan tin mes hopi punto?**

duna nan e mesun colo.



12

**kleur blauw, geel, cora y berde.**

cada rij, cada kolom y e 2 diagonalnan (schuin) mester tin 4 diferente colo.

por ehempel: blauw – geel – cora – berde.

y no: blauw – blauw – cora – berde.

blauw	berde	cora	geel
geel	cora	berde	blauw
berde	blauw	geel	cora
cora	geel	blauw	berde

**mas cu 1 contesta.**

13

**rij di fibonacci.**

wak bon y completa e rij.

1	2	3	5	8	13	21	34	55
---	---	---	---	---	----	----	----	----

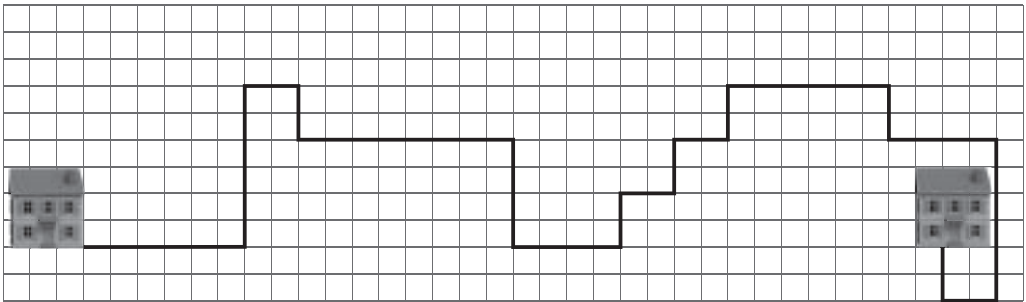
un rij mas.

3	4	7	11	18	29	47	76
---	---	---	----	----	----	----	----













abo mes awor. **mas cu 1 contesta.**

6	8	14	22	36	58	94	152
---	---	----	----	----	----	----	-----

14

**con largo e caminda ta?**1 km **32 km**

## cuanto bo ta resta?

bo tin:	bo ta cumpra:	bo ta resta:
		<b>f11</b> _____
		<b>f3</b> _____
		<b>f5</b> _____
		<b>f5</b> _____
		<b>f16</b> _____
		<b>f3</b> _____

16

**driehoek magico.**

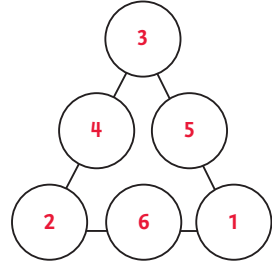
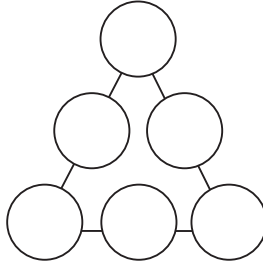
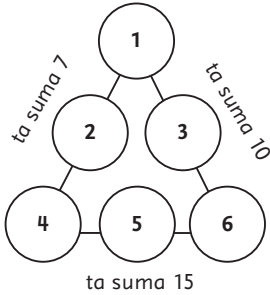
yena e numbernan 1, 2, 3, 4, 5 y 6.

tip!


na cada banda bo por suma.

practica.

na cada banda ta suma 9.



17

**cuanto florin?**

18

**pinta e flechanan.**

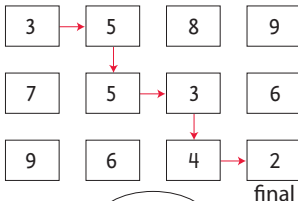
mas cu 1 contesta.

tip!

mester suma menos punto posibel.

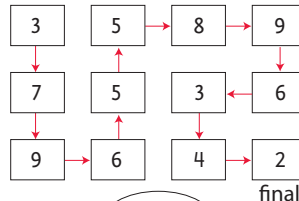
mester suma mas punto posibel.

start



22

start



67





tip!

## 1 cuanto año nan tin?

yena nan edad. **mas cu 1 contesta.**  
pone nan den secuencia di jong pa bieu.

7\_aña

3



3\_aña

2



72\_aña

8



10\_aña

4



1\_aña

1



36\_aña

5



40\_aña

6



65\_aña

7



## 2 cua di e somnan tin e mesun contesta?

duna nan e mesun colo.

$60 + 20$
$70 - 40$
$30 + 30$
$10 + 5$
$35 + 35$

$14 + 30$
$30 + 14$
$4 + 4$
$20 - 5$
$100 - 20$

$12 - 4$
$60 + 10$
$80 + 40$
$15 + 15$
$26 + 37$

$45 + 15$
$100 + 20$
$100 - 70$
$37 + 26$
$40 + 20$

## 3 bay di A pa B.

pasa tur e hokinan.

cuanto bo mester yena na B?



A

2	+ 3	- 2	+ 4	- 3
+ 2	- 2	+ 5	- 3	+ 4
- 3	+ 4	- 2	+ 5	- 2
+ 3	- 2	+ 4	- 2	+ 3
- 4	+ 5	- 3	+ 3	19

B



4

## cuanto nan ta resta?

nico tin:



e ta cumpra:



e ta resta:

**f 10**

luci tin:



e ta cumpra:



e ta resta:

**f 11,50**

dany tin:



e ta cumpra:



e ta resta:

**f 14**

timo tin:



e ta cumpra:



e ta resta:

**f 2,50**

anita tin:



e ta cumpra:



e ta resta:

**f 8,25**

### 5 pone of kita? scoge + of -.

$38 - 4 = 34$

$47 + 3 = 50$

$23 + 8 = 31$

$36 - 6 = 30$

$12 + 9 = 21$

$27 + 7 = 34$

$41 - 8 = 33$

$36 + 5 = 41$

$18 + 3 + 4 = 25$

$37 - 8 + 7 = 36$

$43 + 6 - 9 = 40$

$28 + 5 - 6 = 27$

### 6 traha e puzzel.

tip!

$\text{bus} = 4 \quad \text{bicycle} = 6 \quad \text{car} = 2$

$\text{bus} + \text{bus} = 8$

$\text{bus} + \text{bicycle} = 10$

$\text{bicycle} + \text{car} = 8$

$\text{bicycle} + \text{bicycle} = 12$

$\text{car} + \text{car} = 4$

$\text{bus} + \text{car} = 6$

$\text{car} + \text{car} + \text{car} + \text{bus} = 10$

$\text{bicycle} + \text{car} + \text{bicycle} = 14$

$\text{bus} - \text{car} = 2$

$\text{bicycle} - \text{car} = 4$

7

cuanto tempo a pasa?

tip!



3 cuarto di ora of 45 minuut.

mey ora of 30 minuut.

3 cuarto di ora of 45 minuut.



1 ora of 60 minuut.

1 ora y 3 cuarto di ora of

2 ora y 30 minuut.

1 ora y 45 minuut.

8

traha muraya di number.



mas cu 1 contesta.



mas cu 1 contesta.

9

controla e somnan di lucas.

kico el a haci fout?

el a traha som di pone en bes di som di kita.

con bo por yuda lucas? pa medio di un ehempel.

$$12 + 14 = 26$$

$$24 - 13 = 37 \mathbf{11}$$

$$23 + 16 = 39$$

$$34 - 14 = 48 \mathbf{20}$$

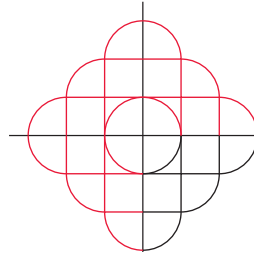
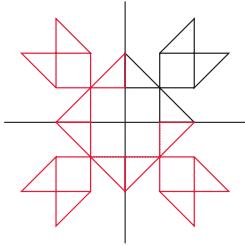
$$26 + 18 = 44$$

$$34 - 17 = 51 \mathbf{17}$$

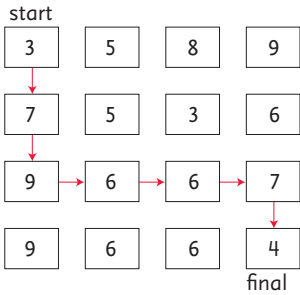
$$48 + 24 = 72$$

$$52 - 29 = 81 \mathbf{23}$$

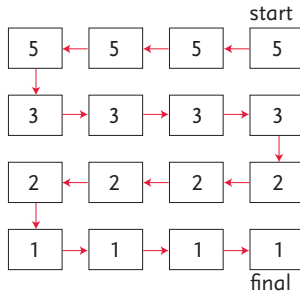
10 uza spiel y completa e figura den tur huki.  
bo mag kleur e mosaiknan.



11 pinta e flechanan. uza → ← ↑ of ↓

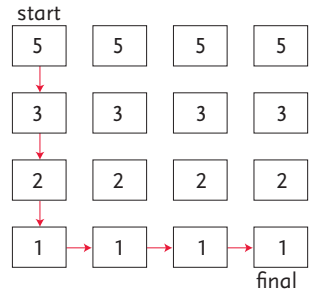


mester suma 42



mester suma mas punto posibel

44



mester suma menos punto posibel

14

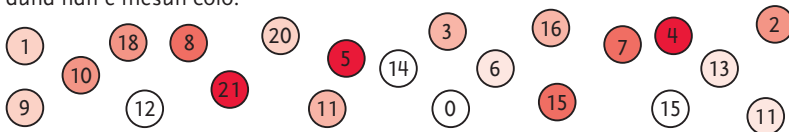
12 completa e somnan.

2	0	+	6	0	=	1	0	0	-	2	0
2	0	+	4	0	=	9	0	-	3	0	
4	0	+	3	0	=	1	0	0	-	3	0
1	0	+	2	0	=	8	0	-	5	0	

5	0	+	5	0	=	1	0	0	-	0	
2	0	+	4	0	=	8	0	-	2	0	
4	0	+	2	0	=	1	0	0	-	4	0
3	0	+	5	0	=	1	0	0	-	2	0

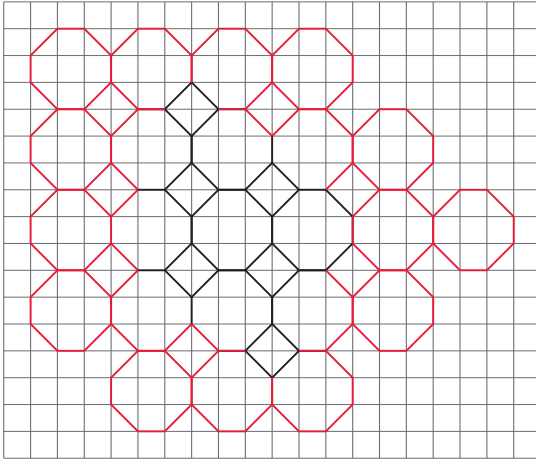
5	0	+	2	0	=	1	0	0	-	3	0
2	0	+	4	0	=	9	0	-	3	0	
6	0	+	2	0	=	9	0	-	1	0	
1	0	+	1	0	=	7	0	-	5	0	

13 busca 3 number cu ta suma 30.  
duna nan e mesun colo.



14

sigui cu e patronchi.  
bo mag kleur tambe.



15

3 riba un liña.  
kleur 3 hoki riba un liña.  
nan mester suma e number ariba.

100		
35	35	35
25	40	35
35	30	40

95		
30	45	30
35	30	40
35	25	30

80		
25	25	25
35	30	35
25	35	30

65		
25	35	30
40	20	25
15	25	20

16

controla e somnan di mel.  
skirbi e contestanan corecto.

$$32 + 19 = 32 + 20 - 1 = 51$$

$$54 + 29 = 54 + 30 - 1 = 83$$

$$45 + 18 = 45 + 20 - 2 = 63$$

$$28 + 58 = 28 + 60 - 2 = 86$$

$$32 - 19 = 32 - 20 - 1 = 11 \mathbf{13}$$

$$54 - 29 = 54 - 30 - 1 = 23 \mathbf{25}$$

$$45 - 18 = 45 - 20 - 2 = 23 \mathbf{27}$$

$$78 - 38 = 78 - 40 - 2 = 36 \mathbf{40}$$

$$32 - 19 = \mathbf{32 - 20 + 1 = 13}$$


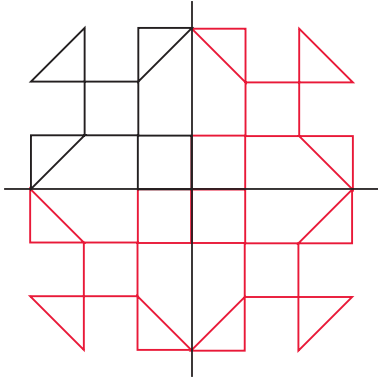
$$54 - 29 = \mathbf{54 - 30 + 1 = 25}$$

$$45 - 18 = \mathbf{45 - 20 + 2 = 27}$$

$$78 - 38 = \mathbf{78 - 40 + 2 = 40}$$

- 17 uza spiel y completa e figura den tur huki.  
bo mag kleur e mosaiknan.

bo mes traha un figura. **mas cu 1 contesta.**



- 18 4 riba un liña.  
kleur 4 hoki riba un liña.  
nan mester suma e number ariba.

100			
25	35	25	25
15	25	25	15
35	35	15	15
35	25	25	35

80			
20	35	35	20
25	20	30	35
30	35	20	35
35	40	25	20

120			
40	30	25	35
35	30	35	30
40	35	25	30
25	30	35	35

- 19 yena e numbernan.

mita	2	3	4	5	11	6	10	8	17	19
number	4	6	8	10	22	12	20	16	34	38
dobel	8	12	16	20	44	24	40	32	68	76

mita	7	8	10	6	9	12	13	15	16	18
number	14	16	20	12	18	24	26	30	32	36
dobel	28	32	40	24	36	48	52	60	64	72



20

completa e rijnan.



21

penza un tarea pa bo amigo.

mas cu 1 contesta.



## blok 1

- 2 wak henter e rij prome.
- 3 wak e ehempel.
- 8 uza bloki pa traha stapel.
- 10 bo mes por scoge con bo ta conta.
- 11 practica riba un otro blachi prome.
- 13 uza bloki.
- 14 pinta den klad prome.
- 16 bo mag uza bloki.
- 17 dicon nora a haya 7 punto?
- 22 wak henter e rij prome.
- 24 purba hala bo pion den un solo biaha.  
bo por palabra pa yega net na e rabo.  
si esaki no ta logra, conta bay bek.

## blok 2

- 1 bo por skirbi e contesta memey di e borchí.
- 4 con bo por sa cua number ta e contesta na e somnan di +?
- 6 con ta mas facil pa conta?
- 12 con bo ta scoge e numbernan?
- 14 tene cuenta cu e number memey.
- 20 con ta mas facil pa conta?

## blok 3

- 3 uza e oloshi di instruccion.
- 4 con ta mas facil pa conta?
- 8 bo por conta dia riba e kalender.  
por mas lihe?
- 13 unda ta miho pa cuminsa?
- 17 pone un spiel riba e liña diki di e prome figura.  
kico bo ta ripara?  
pinta un liña diki den e siguiente figura sin uza e spiel.  
uza e spiel pa controla.
- 18 bisa kico mester haci pa completa e rij.  
por ehempel: pone 2, kita 1, pone 2, kita 1.

## **blok 4**

- 1 pone un spiel riba e liña diki.  
despues pinta e refleho sin uza spiel.
- 2 sigui purba te ora bo logra.  
cada biahá bo por cuminsa cu un otro number.  
bo por varia som di pone y som di kita.
- 6 wak si un otro som por yuda bo.
- 10 skirbi tur e contestanan den e bichi.  
mita di 10 ta 5.  
mita di 5 no por.  
pone 1 acerca ta bira 6.  
mita di 6 ta 3.  
sigui asina.
- 12 den cuanto pida a parti e liña?
- 14 con ta mas facil pa conta?

## **blok 5**

- 2 bo por mira cu 2 hoki ta 1 kilometer.  
kleur cada kilometer un otro colo.
- 8 conta e pidanan riba e liña di number.
- 10 pensa ki figura rosa a corta.  
pa controla bo tambe por dobla y corta mescos.
- 16 e tarea aki ta dificil.  
skirbi e numbernan riba diferente carchi.  
bo por move e numbernan te ora bo logra.
- 18 pa suma menos punto posibel bo ta scoge number chikito.  
pero tene cuenta cu e largura di e ruta.

## **blok 6**

- 1 wak e edad di e mama y e wela.  
awor bo mes por sigui.  
cuanto aña bo ta kere e tata tin?
- 6 wak e prome 3 somnan bon.
- 7 bo mes por scoge con bo ta skirbi e tempo cu a pasa:  
minuut, ora, mey ora, cuarto di ora.
- 21 bo ta corda tur e tareanan cu bo a traha.  
cua di nan bo a gusta mas?  
abo mes pensa un tarea asina.

## Conta cu mi

Metodo di matematica pa enseñansa primario

## Alles telt

Reken-wiskundemethode voor het basisonderwijs

### Traduccion y adaptacion

Grupo Matematica  
Oyito Tromp  
Barbara Meaux- O'Connor  
Walter de Vet  
Garrick Thodé  
Berthson Boekhoudt

### Redaccion

Seccion Desaroyo di Curiculo

### Diseño

Criterium, Arnhem

### Diseño grafico

Ebbenhorst Design, De Meern

### Diseño grafico

LaVerbe, Nijmegen

### Realisacion

Paul Dijkstra  
Wietske Linthorst-Dijkstra

### Fotografia

Prince Victor

### Ilustracion

Anka Kresse  
LaVerbe, Nijmegen

ISBN 978-99904-1-346-5

Prome imprenta, prome edicion

© Departamento di Enseñansa di Aruba 2011

### Auteurs

Mirjam van Gemert  
Anita Lek

### Redactie

Broodtekst redactie, Utrecht  
Marieke van Osch  
Fundamenteel, Culemborg

### Ontwerp

Criterium, Arnhem

### Opmaak

GrafData, Deventer

### Vormgeving en beeldverwerking

LaVerbe, Nijmegen

### Illustraties

Anka Kresse  
LaVerbe, Nijmegen  
Anjo Mutsaars  
Marian Latour

ISBN 978-90-06-63194-4

© ThiemeMeulenhoff, Amersfoort

E cas editorial a trata di regla derecho di autor conforme stipulacion di ley. No obstante esaki, si ainda tin cualkier persona di opinion cu nan por aserta cierto derecho, nan por dirigi nan mes na e cas editorial. ThiemeMeulenhoff ta desaroya material didactico pa enseñansa primario, enseñansa secundario general, enseñansa profesional, enseñansa di adulto y enseñansa superior profesional. Pa mas informacion tocante ThiemeMeulenhoff y un bista general di nos material educativo: [www.thiememeulenhoff.nl](http://www.thiememeulenhoff.nl)

Tur derecho reserva.

Ta prohibi pa reproduci, download y/of publica, e edicion aki of parti di dje na ningun forma of medio, ni cu ta electronico, mecanico, fotocopia of di transmision, sin previo autorisacion por escrito di e cas editorial.

Tin caso specifico cu ta permiti pa haci copia for di e edicion aki, a base di articulo 16B di Auteurswet 1912 jo het Besluit van 20 juni 1974, Stb. 351, manera cambia den e Besluit van 23 augustus 1985, Stb. 471 y articulo Auteurswet 1912, por cumpli previamente cu e exigencianan legal di compensacion na Stichting Publicatie en Reprorechten Organisatie (PRO), Postbus 3060, 2130 KB Hoofddorp ([www.cedar.nl/pro](http://www.cedar.nl/pro))